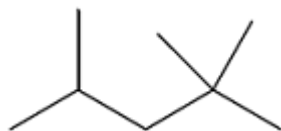


**Q1.** Isooctane ( $C_8H_{18}$ ) is the common name for the branched-chain hydrocarbon that burns smoothly in car engines. The skeletal formula of isooctane is shown below.



(a) Give the IUPAC name for isooctane.

.....

(1)

(b) Deduce the number of peaks in the  $^{13}C$  NMR spectrum of isooctane.

5

6

7

8

(1)

(c) Isooctane can be formed, together with propene and ethene, in a reaction in which one molecule of an alkane that contains 20 carbon atoms is cracked.

Using molecular formulas, write an equation for this reaction.

.....

(1)

(d) How do the products of the reaction in part (c) show that the reaction is an example of thermal cracking?

.....

(1)

- (e) Deduce the number of monochloro isomers formed by isooctane.  
Draw the structure of the monochloro isomer that exists as a pair of optical isomers.

Number of monochloro isomers .....

Structure

(2)

- (f) An isomer of isooctane reacts with chlorine to form only one monochloro compound.

Draw the **skeletal formula** of this monochloro compound.

(1)

- (g) A sample of a monochlorooctane is obtained from a comet. The chlorine in the monochlorooctane contains the isotopes  $^{35}\text{Cl}$  and  $^{37}\text{Cl}$  in the ratio 1.5 : 1.0  
Calculate the  $M_r$  of this monochlorooctane.

$M_r = \dots\dots\dots$

(2)

- (h) Isooctane reacts with an excess of chlorine to form a mixture of chlorinated compounds.  
One of these compounds contains 24.6% carbon and 2.56% hydrogen by mass.  
Calculate the molecular formula of this compound.

Molecular formula = .....

(3)  
(Total 12 marks)

Q2.(a) **Table 1** shows some data about fundamental particles in an atom.

**Table 1**

Particle	proton	neutron	electron
Mass / g	$1.6725 \times 10^{-24}$	$1.6748 \times 10^{-24}$	$0.0009 \times 10^{-24}$

- (i) An atom of hydrogen can be represented as  ${}^1\text{H}$

Use data from **Table 1** to calculate the mass of this hydrogen atom.

.....

(1)

- (ii) Which **one** of the following is a fundamental particle that would **not** be deflected by an electric field?

**A** electron

**B** neutron

**C** proton

Write the correct letter, **A**, **B** or **C**, in the box.



(1)

(b) A naturally occurring sample of the element boron has a relative atomic mass of 10.8.

In this sample, boron exists as two isotopes,  $^{10}\text{B}$  and  $^{11}\text{B}$

(i) Calculate the percentage abundance of  $^{10}\text{B}$  in this naturally occurring sample of boron.

.....  
.....  
.....  
.....  
.....

(2)

(ii) State, in terms of fundamental particles, why the isotopes  $^{10}\text{B}$  and  $^{11}\text{B}$  have similar chemical reactions.

.....  
.....  
.....

(1)

(c) Complete **Table 2** by suggesting a value for the third ionisation energy of boron.

**Table 2**

	First	Second	Third	Fourth	Fifth
Ionisation energy / $\text{kJ mol}^{-1}$	799	2420		25 000	32 800

(1)

(d) Write an equation to show the process that occurs when the **second** ionisation energy of boron is measured. Include state symbols in your equation.

.....

(1)

- (e) Explain why the second ionisation energy of boron is higher than the first ionisation energy of boron.

.....

.....

(1)

(Total 8 marks)

- Q3.(a) Sodium hydrogencarbonate (NaHCO<sub>3</sub>) can also be used to neutralise ethanoic acid spillages. The equation for this reaction is shown below.



State the ideal gas equation.

.....

(1)

- (b) There are several methods by which ethanoic acid is synthesised on an industrial scale. One method is the oxidation of butane in the presence of metal ion catalysts. Balance the equation given below which summarises this reaction.



(1)

- (c) A second method by which ethanoic acid is synthesised involves the oxidative fermentation of ethanol in the presence of bacteria. The equation representing this reaction is given below.



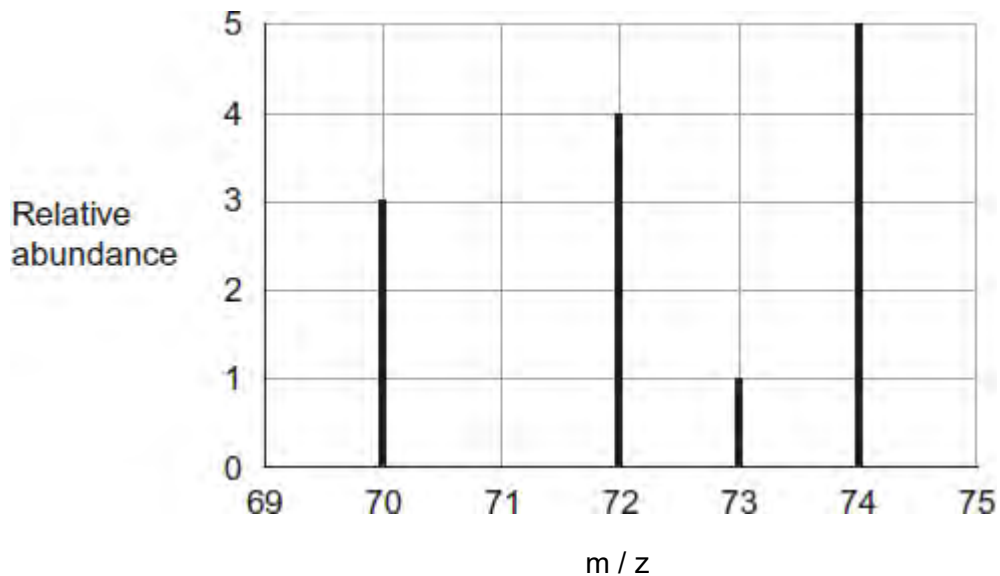
In a small scale experiment using this second method it was found that 23.0 g of ethanol produced only 4.54 g of ethanoic acid. Calculate the percentage yield for this experiment.

.....

.....

.....

Q4. The mass spectrum of the isotopes of element X is shown in the diagram.



(a) Define the term *relative atomic mass*.

.....  
.....  
.....  
.....

(2)

(b) Use data from the diagram to calculate the relative atomic mass of X.

Give your answer to one decimal place.

.....  
.....  
.....  
.....  
.....  
.....

(3)

(c) Identify the ion responsible for the peak at 72

.....

(1)

(d) Identify which one of the isotopes of **X** is deflected the most in the magnetic field of a mass spectrometer. Give a reason for your answer.

Isotope .....

Reason .....

(2)

(e) In a mass spectrometer, the relative abundance of each isotope is proportional to the current generated by that isotope at the detector.

Explain how this current is generated.

.....  
.....  
.....  
.....

(2)

(f) **X** and **Zn** are different elements.

.....  
.....

Explain why the chemical properties of  $^{70}\text{X}$  and  $^{70}\text{Zn}$  are different.

(1)

(Total 11 marks)

**Q5.** (a) Define the term *relative atomic mass*.

An organic fertiliser was analysed using a mass spectrometer. The spectrum

showed that the nitrogen in the fertiliser was made up of 95.12%  $^{14}\text{N}$  and 4.88%  $^{15}\text{N}$

Calculate the relative atomic mass of the nitrogen found in this organic fertiliser.  
Give your answer to two decimal places.

.....  
.....  
.....  
.....  
.....  
.....  
.....

(4)

- (b) In a mass spectrometer, under the same conditions,  $^{14}\text{N}^+$  and  $^{15}\text{N}^+$  ions follow different paths. State the property of these ions that causes them to follow different paths.

State **one** change in the operation of the mass spectrometer that will change the path of an ion.

.....  
.....  
.....  
.....

(2)

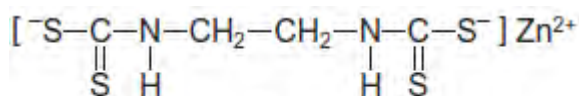
- (c) Organic fertilisers contain a higher proportion of  $^{15}\text{N}$  atoms than are found in synthetic fertilisers.

State and explain whether or not you would expect the chemical reactions of the nitrogen compounds in the synthetic fertiliser to be different from those in the organic fertiliser. Assume that the nitrogen compounds in each fertiliser are the same.

.....  
.....  
.....  
.....



- Q6.(a) Because of the toxic nature of the copper(II) ion, a wide range of alternative anti-fungal drugs has been developed for use in agriculture. One example is Zineb.



Zineb

- (i) The negative ion in Zineb could act as a bidentate ligand.

On the structure above, draw a ring around each of **two** atoms that could provide the lone pairs of electrons when this ion acts as a bidentate ligand.

(1)

- (ii) Calculate the  $M_r$  of Zineb. Give your answer to the appropriate precision.

.....  
.....  
.....  
.....

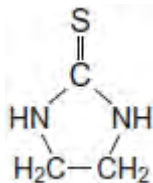
(1)

- (iii) Name the functional group formed at each end of the negative ion when all the sulfur atoms in the structure of Zineb are replaced by oxygen atoms.

.....

(1)

- (b) Zineb has been investigated for harmful effects. Generally, Zineb has been found to be safe to use in agriculture. It is only slightly soluble in water and is sprayed onto plants. A breakdown product of Zineb is ethylene thiourea (ETU), which is very soluble in water. The structure of ETU is shown below.



Determine the percentage, by mass, of sulfur in ETU ( $M_r = 102.1$ ).

.....  
.....  
.....

(1)

- (c) Chromatography is a technique used to show the presence of a small amount of ETU in Zineb.

Outline how this technique is used to separate and identify ETU from a sample of Zineb powder.

.....  
.....  
.....  
.....  
.....  
.....  
.....  
.....  
.....  
.....  
.....

(4)

(Total 8 marks)